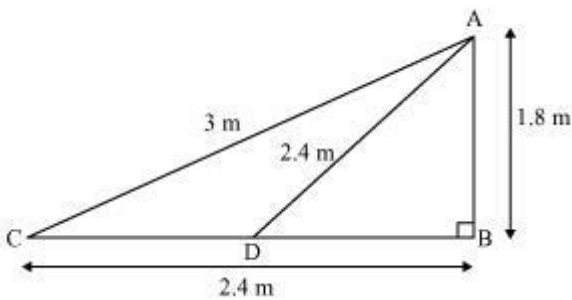
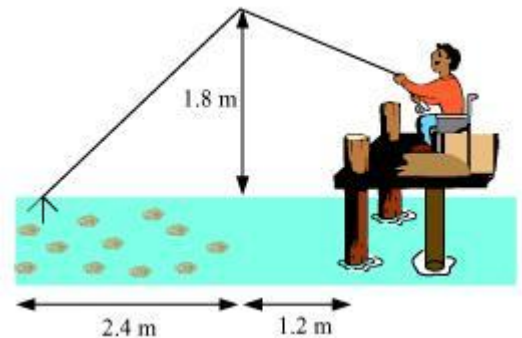


CLASS - X Mathematics (Similar Triangle): Optional Exercise Solved

1. Q. Nazima is fly fishing in a stream. The tip of her fishing rod is 1.8 m above the surface of the water and the fly at the end of the string rests on the water 3.6 m away and 2.4 m from a point directly under the tip of the rod. Assuming that her string (from the tip of her rod to the fly) is taut, how much string does she have out (see Fig. 6.64)? If she pulls in the string at the rate of 5 cm per second, what will be the horizontal distance of the fly from her after 12 seconds?



$$\Delta ABC, AC^2 = AB^2 + BC^2 = (1.8 \text{ m})^2 + (3.6 \text{ m})^2$$

$$AC^2 = (1.8^2 + 3.6^2) \text{ m}^2 \Rightarrow AC = \sqrt{14.04} \text{ m} \approx 3.75 \text{ m}$$

$$AC = 3.75 \text{ m}$$

Thus, the length of the string out is 3.75 m.

String pulled in 12 seconds at the rate of 5 cm per second. =
 $12 \times 5 = 60 \text{ cm} = 0.6 \text{ m}$

$$\text{String above water} = AD = (AC - 0.6) \text{ m} = 3.75 - 0.6 = 3.15 \text{ m}$$

In ΔADB , $AB^2 + BD^2 = AD^2$

$$(1.8 \text{ m})^2 + BD^2 = (3.15 \text{ m})^2 \quad BD^2 = (3.15^2 - 1.8^2) \text{ m}^2 = 2.52 \text{ m}^2 \quad BD = 1.587 \text{ m}$$

Horizontal distance of fly after 12 sec. = $BD + 1.2 \text{ m} = (1.587 + 1.2) \text{ m} = 2.787 \text{ m} \approx 2.79 \text{ m}$

2. Q. In the given figure, D is a point on side BC of ΔABC such that $BD/CD = AB/AC$

Prove that AD is the bisector of $\angle BAC$.

Let us extend BA to P such that $AP = AC$. Join PC.

It is given that, $BD/CD = AB/AC \Rightarrow BD/CD = AP/AC$

By using the converse of basic proportionality theorem, we obtain

$AD \parallel PC$

$$\Rightarrow \angle BAD = \angle APC \text{ (Corresponding angles) ... (1)}$$

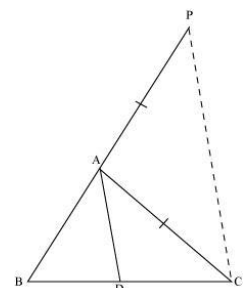
$$\text{And, } \angle DAC = \angle ACP \text{ (Alternate interior angles) ... (2)}$$

By construction, we have $AP = AC$

$$\Rightarrow \angle APC = \angle ACP \text{ ... (3)}$$

From (1), (2), and (3), we obtain

$$\angle BAD = \angle DAC \Rightarrow AD \text{ is the bisector of the angle } \angle BAC.$$



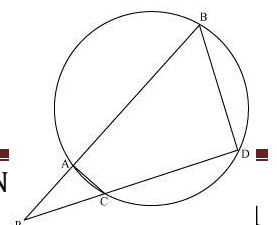
3. Q. In the given figure, two chords AB and CD of a circle intersect each other at the point P (when produced) outside the circle. Prove that

(i) $\Delta PAC \sim \Delta PDB$ (ii) $PA \cdot PB = PC \cdot PD$

Sol: (i) In ΔPAC and ΔPDB ,

$$\angle P = \angle P \text{ (Common)}$$

$$\angle PAC + \angle CAB = 180^\circ \text{ also } \angle CAB + \angle PDB = 180^\circ$$



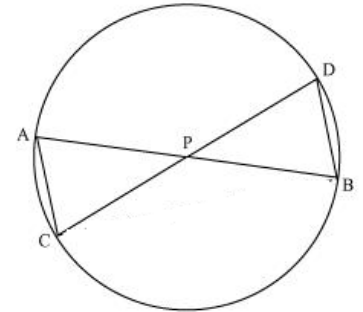
$$\angle PAC = \angle PDB$$

$\therefore \Delta PAC \sim \Delta PDB$ (AA similarity)

(ii) We know that the corresponding sides of similar triangles are proportional.

$$\therefore \frac{PA}{PD} = \frac{AC}{DB} = \frac{PC}{PB} \Rightarrow \frac{PA}{PD} = \frac{PC}{PB} \quad PA \cdot PB = PC \cdot PD$$

Q. In the given figure, two chords AB and CD intersect each other at the point P. prove that:



(i) $\Delta APC \sim \Delta DPB$ (ii) $AP \cdot BP = CP \cdot DP$

(i) In ΔAPC and ΔDPB ,

$\angle APC = \angle DPB$ (Vertically opposite angles)

$\angle CAP = \angle BDP$ (Angles in the same segment)

$\Delta APC \sim \Delta DPB$ (By AA similarity)

(ii) We have $\Delta APC \sim \Delta DPB$

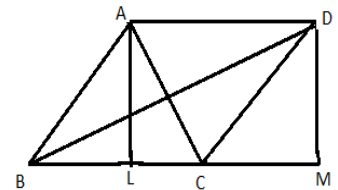
We know that the corresponding sides of similar triangles are proportional.

$$\therefore \frac{AP}{DP} = \frac{PC}{PB} = \frac{CA}{BD} \Rightarrow \frac{AP}{DP} = \frac{PC}{PB} \quad AP \cdot PB = PC \cdot DP$$

4. Q. Prove that the sum of the squares of the diagonals of parallelogram is equal to the sum of the squares of its sides.

Sol: Let ABCD be a parallelogram.

Draw perpendicular DM on extended side BC and AL on side BC.



In ΔABL and ΔDMC

$$\angle L = \angle N = 90^\circ \quad AB = DM \quad \text{and} \quad AL = DM$$

$\Delta ABL \cong \Delta DMC$ (RHS) $BL = CM$ (CPCT)

Applying Pythagoras theorem in ΔALC , we obtain $AC^2 = AL^2 + LC^2 \dots (i)$

Applying Pythagoras theorem in ΔDCM , we obtain $BD^2 = BM^2 + DM^2 \dots (ii)$

Adding (i) and (ii)

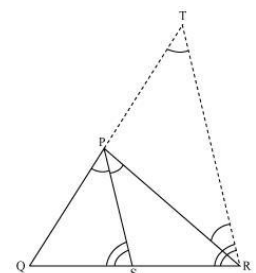
$$\begin{aligned} AC^2 + BD^2 &= AL^2 + LC^2 + BM^2 + DM^2 \\ &= AB^2 + BL^2 + (BC - BL)^2 + (BC + CM)^2 + DC^2 - CM^2 \quad [BL = CM] \\ &= AB^2 + BC^2 + BL^2 - 2BC \cdot BL + BC^2 + CM^2 + 2BC \cdot CM + DC^2 - CM^2 \\ AC^2 + BD^2 &= AB^2 + BC^2 + CD^2 + DA^2 \end{aligned}$$

5. Q. In the given figure, PS is the bisector of $\angle QPR$ of ΔPQR . Prove that $QS/SR = PQ/PR$

Let us draw a line segment RT parallel to SP which intersects extended line segment QP at point T.

Given that, PS is the angle bisector of $\angle QPR$.

$$\angle QPS = \angle PTR \quad \text{also,} \quad \angle SPR = \angle PRT$$



But, $\angle QPS = \angle SPR$

$\angle PTR = \angle PRT \Rightarrow \therefore PT = PR$

By using basic proportionality theorem for

$$\frac{QS}{SR} = \frac{QP}{PT} \Rightarrow \frac{QS}{SR} = \frac{PQ}{PR} \quad \Delta QTR, PS \parallel TR$$

6. Q. In the given figure, D is a point on hypotenuse AC of ΔABC , $DM \perp BC$ and $DN \perp AB$, $BD \perp AC$ Prove that:

(i) $DM^2 = DN \cdot MC$ (ii) $DN^2 = DM \cdot AN$

In ΔBDM and DMC

$\angle M = \angle M$

$\angle DCM + \angle MDC = \angle BDM + \angle MDC = 90^\circ$

$\Rightarrow \angle DCM = \angle BDM$

$\Delta BDM \sim \Delta DMC$ (AA similarity)

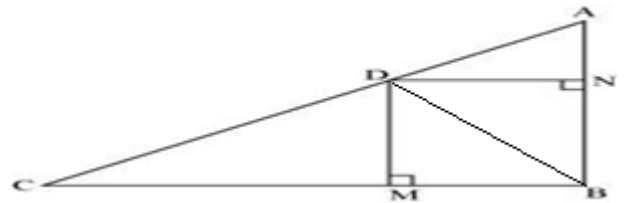
$$\frac{DM}{BM} = \frac{MC}{DM}$$

But, $BM = DN$

$$\frac{DM}{DN} = \frac{MC}{DM}$$

$$DM^2 = DN \cdot MC \quad \text{proved.}$$

Similarly we can prove $DN^2 = DM \cdot AN$



7. Q. In the given figure, ABC is a triangle in which $\angle ABC > 90^\circ$ and $AD \perp CB$ produced. Prove that $AC^2 = AB^2 + BC^2 + 2BC \cdot BD$.

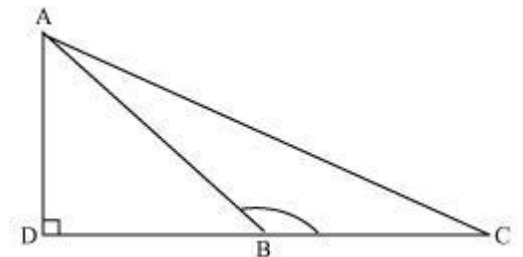
$$AC^2 = AB^2 + BC^2 + 2BC \cdot BD.$$

$$\text{Sol: } AC^2 = AD^2 + DC^2$$

$$= AB^2 - DB^2 + (DB + BC)^2$$

$$= AB^2 - DB^2 + DB^2 + BC^2 + 2DB \times BC$$

$$AC^2 = AB^2 + BC^2 + 2DB \times BC$$



Q. 8 : In the given figure, ABC is a triangle in which $\angle ABC < 90^\circ$ and $AD \perp BC$. Prove that

$$AC^2 = AB^2 + BC^2 - 2BC \cdot BD.$$

$$\text{Sol: In } \Delta ADC, AC^2 = AD^2 + DC^2$$

$$\Rightarrow AC^2 = AB^2 - DB^2 + DC^2$$

$$\Rightarrow AC^2 = AB^2 - DB^2 + (BC - BD)^2$$

$$\Rightarrow AC^2 = AB^2 - DB^2 + BC^2 + BD^2 - 2BC \cdot BD$$

$$AC^2 = AB^2 + BC^2 - 2BC \cdot BD \quad \text{Proved}$$

