

MODEL QUESTION PAPER—6

CLASS—IX (C.B.S.E.) SOCIAL SCIENCE TERM—II

Time Allowed: 3 Hours

Maximum Marks: 90

Instructions: Same as Model Question Paper—1.

1. What is a *Charkha*? 1

Or

Which Indian film of Amir Khan is based on cricket? 1

2. Name the wind blowing over the Northern Plains in summer. 1

3. What does Territorial Representation mean? 1

4. Who is a political executive? 1

5. What is the composition of the Supreme Court of India? 1

6. What is the minimum buffer stock norms for the FCI? 1

7. When was the Food For Work Programme launched? 1

8. What is used to measure poverty line? 1

9. How were forests affected by the two World Wars? 3 × 1 = 3

Or

Discuss why the colonial government in India enacted the Waste Land Laws. 3

Or

Briefly state three factors which led to the Enclosures in England. 3

10. Establish the relationship between forest and livelihood. 3

Or

Describe the Pastoralist Military Conquests. 3

Or

Why were Indian farmers reluctant to grow opium? Explain. 3

11. How did the peculiarities of the test cricket shaped by its historical beginning as a village game? 3

Or

How was the question of clothing related to Swadeshi and Boycott Movement?

12. State three causes of depletion of forests in India. $3 \times 1 = 3$
13. Why does the Tamil Nadu coast receive winter rainfall? 3
14. Discuss the major component of population growth. 3
15. Give any three features of the Indian Electoral System. $1\frac{1}{2} + 1\frac{1}{2} = 3$
16. Write any three powers of the Supreme Court. $3 \times 1 = 3$
17. Describe the jurisdiction of a High Court. $3 \times 1 = 3$
18. Describe any three causes of poverty in India. 3
19. Write any two main feature of MNREGA. 3
20. Examine the vulnerability to poverty. 3
21. Discuss the importance of scientific forestry. 5

Or

How do pastoralist adjust with irregular climatic condition? 5

Or

How did rise in population in England contribute to the Enclosure Movement? 5

22. Test cricket is a unique game in many ways. Discuss how it is different from other team games. 5

Or

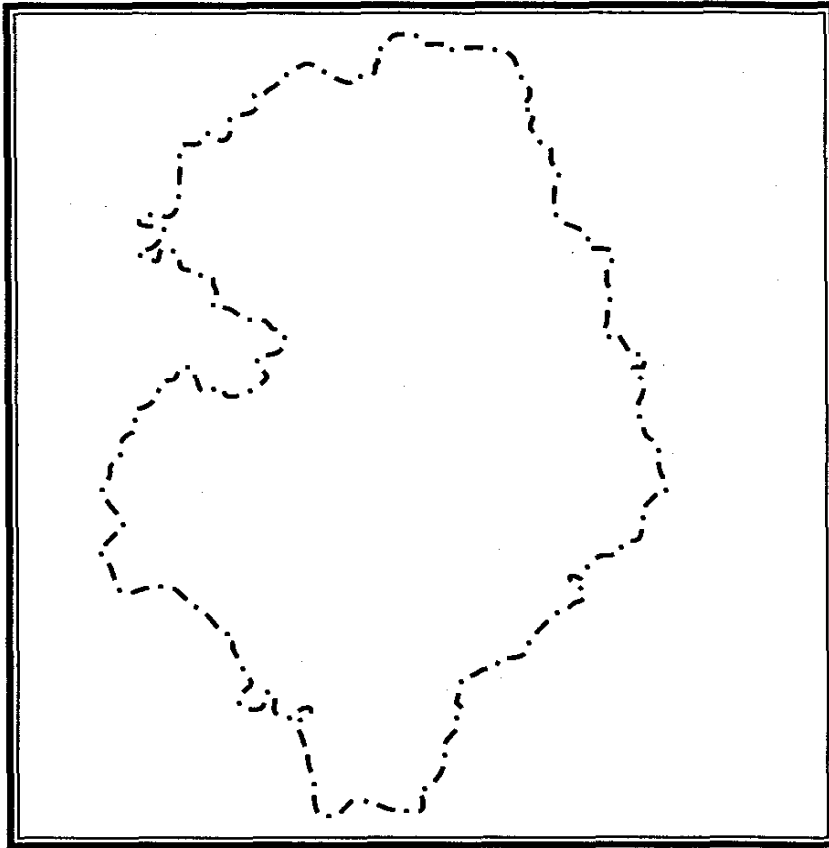
Explain the reason for changes in the clothing patterns and materials in the 18th century. 5

23. 'The impacts of migration are complex, bringing to light both pros and cons'. Throw light on the statement by giving three examples each. 5
24. 'In India, most of rainfall is relief rainfall'. Discuss. 5
25. 'The Prime Minister is the Keystone of the Cabinet arch.' Explain with suitable examples. 5
26. Mention the condition under which fundamental right can be restricted. 5
27. Why self-sufficiency in food grains is necessary for every country? 5
28. Why is buffer stock created by the government? Give five reasons. 5
29. On the given map of Baster mark and locate: $1 + 1 + 1 = 3$

(i) Bhanupratappur

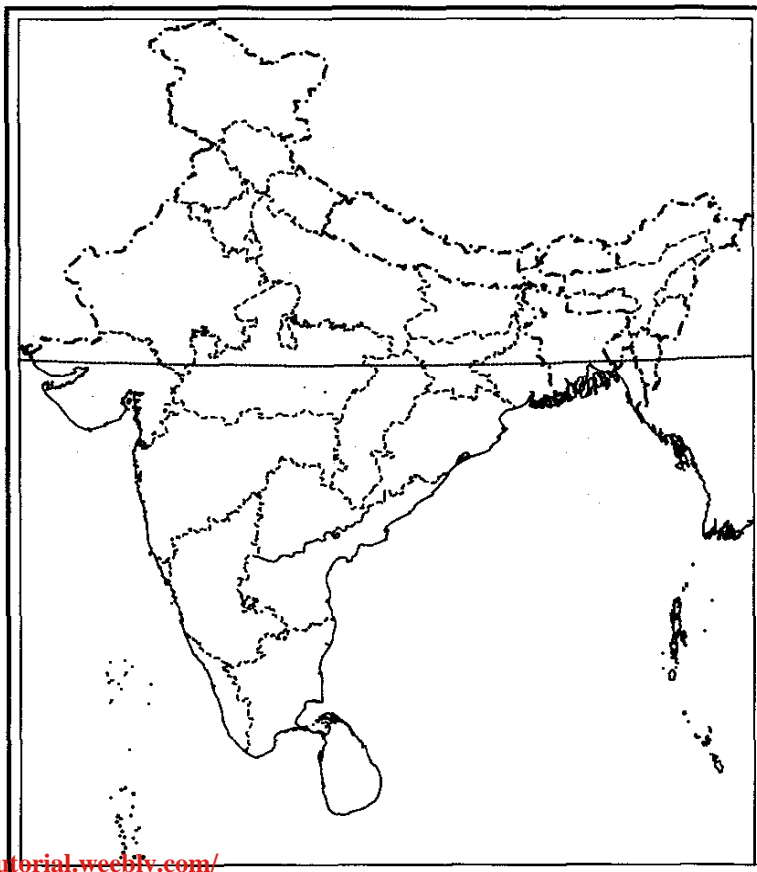
(ii) River Indravati

(iii) River Kolab



Or

On the given map of India, mark and locate pastoralist tribes of Gujjars, Bakarwall, Banjaras and Kubras.



Or

On the given map of USA, mark and locate the three agricultural belts of USA in 1520.



30. (i) Two features, A and B are marked on the given political outline map of India on the next page. Identify these features with the help of following information and write their correct names on the lines marked in the map:

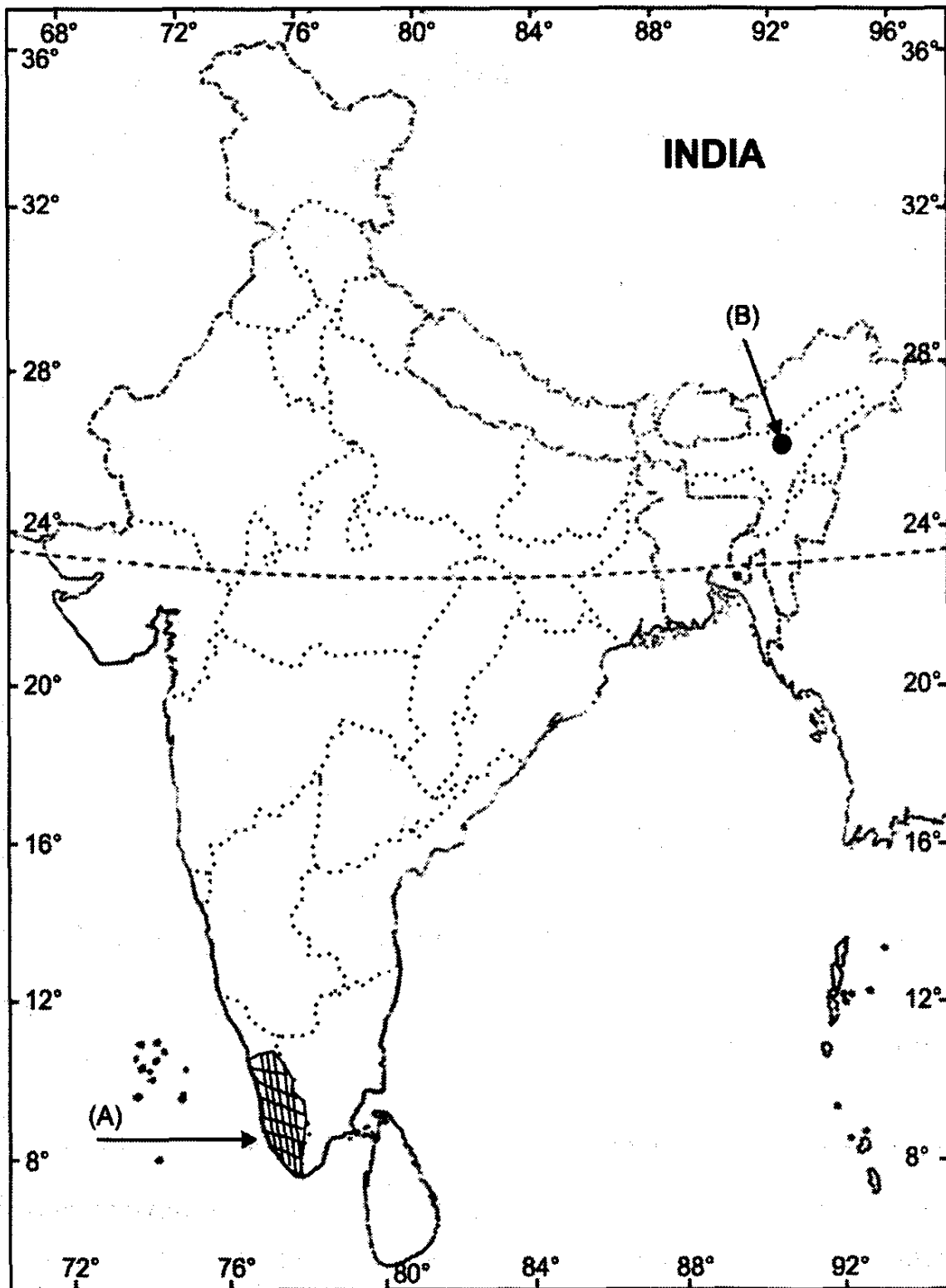
(A) An area of cyclonic rainfall

(B) A wildlife sanctuary

(ii) Locate and label the following on the same outline map of India :

(C) A densely populated metropolitan city

2 + 1 = 3



MODEL QUESTION PAPER—7

CLASS—IX (C.B.S.E.) SOCIAL SCIENCE TERM—II

Time Allowed: 3 Hours

Maximum Marks: 90

Instructions: Same as Model Question Paper—1.

1. Who was the first player to lead the West Indies test team? 1

Or

Who refused to take off his shoes before entering the court room? 1

2. Name the wind that blows in the Northern plains in summer. 1

3. What is the meaning of Territorial Representation? 1

4. Who is a part of the political executive? 1

5. How many Judges are appointed in the Supreme Court? 1

6. What is revamped Public Distribution System? 1

7. Who are food insecure? 1

8. What are the two components of food security system? 1

9. Discuss the importance of scientific forestry. 3

Or

How do the pastoralists adjust with the irregular climatic conditions? 3

Or

How did the rise in population in England contribute to the Enclosure Movement? 3

10. Explain how the forests were affected by the two world wars. $3 \times 1 = 3$

Or

Discuss why the colonial government in India brought the Waste Land Laws. 3

Or

Give three reasons why Indian farmers were reluctant to grow opium. $3 \times 1 = 3$

11. How are the peculiarities of the test cricket shaped by its historical beginnings as a village game? 3

Or

- Give examples of the ways in which the European dress codes were different from the Indian dress codes. 3
12. "In India, most of the rainfall is relief rainfall". Discuss. $3 \times 1 = 3$
13. State three causes of depletion of forests in India. $3 \times 1 = 3$
14. Describe India's population distribution by density. 3
15. How does the Election Commission of India regulate campaign of political parties and candidate to ensure fair and equal chances to compete? 3
16. Explain, what do you mean by the term 'Reserved Constituencies'? Also give examples. 3
17. Mention any two conditions under which the fundamental rights can be restricted. $1\frac{1}{2} + 1\frac{1}{2} = 3$
18. Why do different countries have different poverty lines? 3
19. What is vulnerability? 3
20. Write a short note on Revamped Public Distribution System (RPDS). 3
20. Describe global poverty trend. 3
21. Explain any five ideas of Dietrich Brandis for the management of forest in India during the British period. 5

Or

Why are the Maasais of Africa continuously losing their grazing grounds? Explain 5

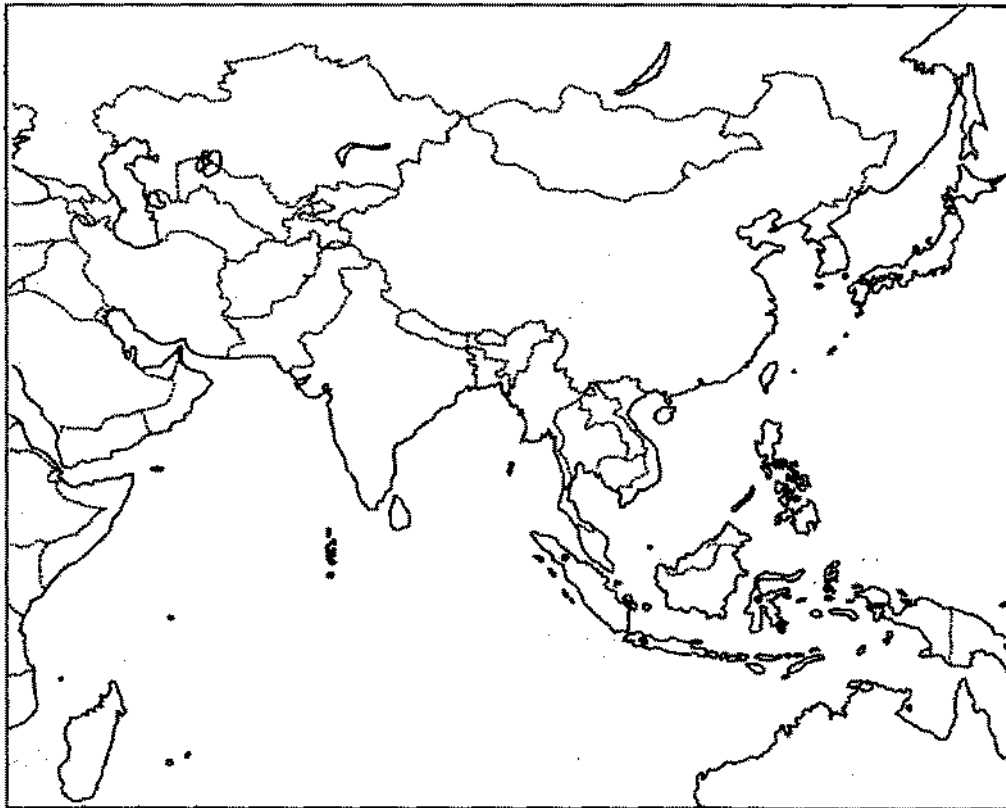
Or

- Explain the factor which led to the enclosure movement in England. 5
22. 'Test cricket is a unique game in many ways'. Discuss how it is different from other team games. 5

Or

- Explain the reason for changes in the clothing patterns and materials in the 18th century.
23. Discuss the major components of population growth. 5
24. You were born in a village and grew up in an urban area. Now you are a doctor by profession, and got a chance to work for the UNO healthcare programme in a village. How will you justify your job profile? 5
25. "The Prime Minister is the keystone of the Cabinet arch." Explain with suitable examples. 5
26. Give any five features of the Indian Electoral System. 5
27. Why is self-sufficiency in food grain necessary for every country? 5
28. Describe how the Public Distribution System (PDS) in India has become more targeted over the years. 5

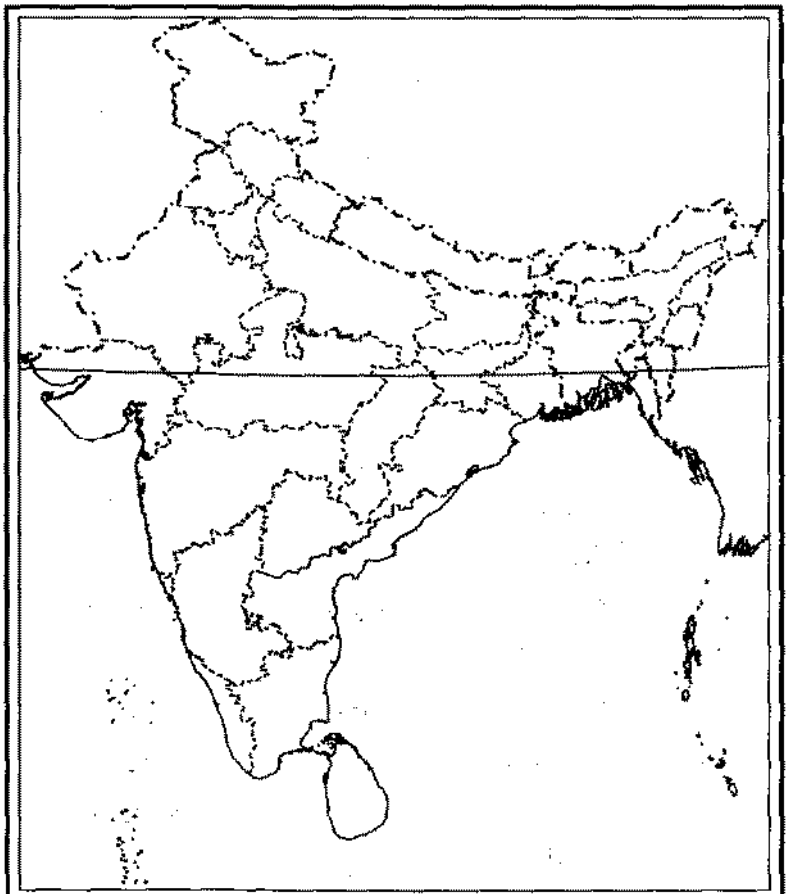
29. In the given outline map of Asia, locate and label the following: 3 × 1 = 3
- (i) Kalimantan (ii) Sumatra (iii) Borneo, Java



Or

On the given political outline map of India, locate and label the following:

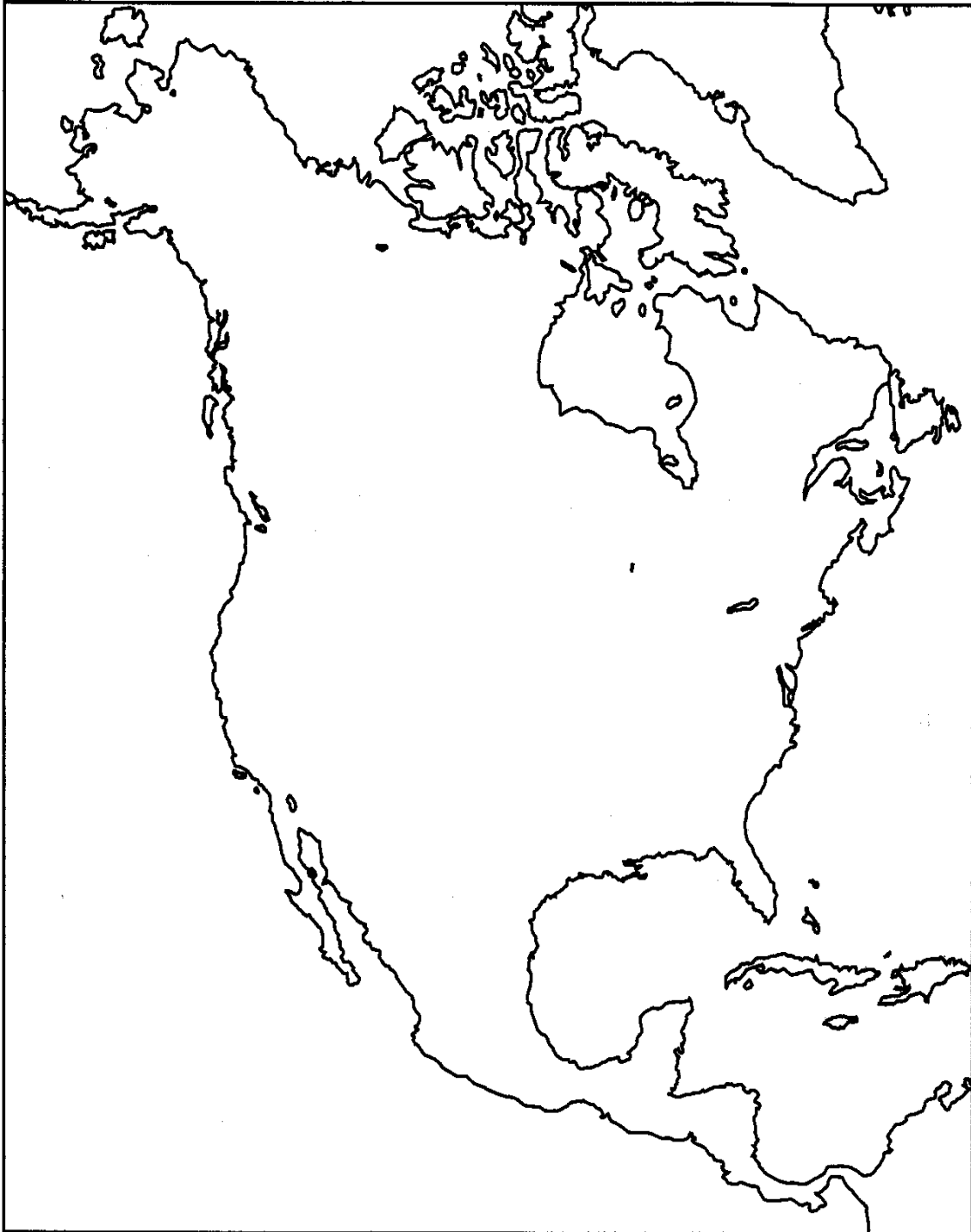
- (i) Pastoral community of Jammu and Kashmir.
- (ii) Pastoral community of Rajasthan.
- (iii) Monpas, a tribe pastoralist community.



Or

On the given map of America, mark and locate the following:

- (i) Two wheat growing area
- (ii) One cotton growing area



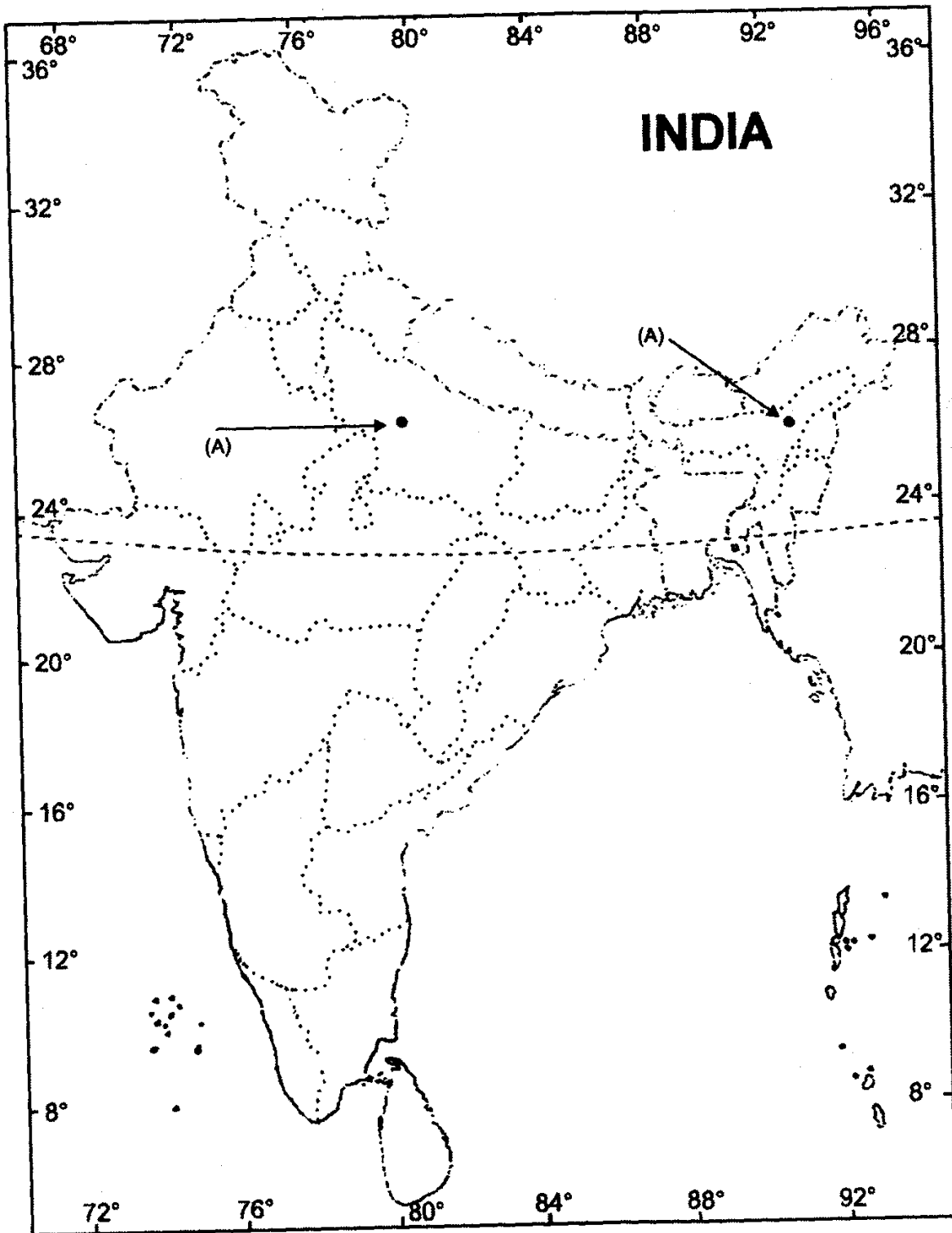
30. (i) Two features, A and B are marked on the given political map of India on the next page. Identify these features with the help of the following information and write their correct names on the lines marked in the map:

- (A) A wildlife sanctuary
- (B) A state with largest population in India

(ii) Locate and label the following on the same outline map of India:

2 + 1 = 3

(C) Thar Desert



MODEL QUESTION PAPER—8

CLASS—IX (C.B.S.E.)

SOCIAL SCIENCE

TERM—II

Time Allowed: 3 Hours

Maximum Marks: 90

Instructions: Same as Model Question Paper—1.

1. What is a sport?

Or

What was a phenta? 1

2. Which region is the first to receive monsoons rains in India? 1

3. What is the tenure of the members of the Election Commission? 1

4. How many members of the Rajya Sabha are nominated by the President? 1

5. Who can remove the Vice-President of India? 1

6. What is social exclusion of poverty? 1

7. What is poverty line? 1

8. When was the most devastating famine take place in India? 1

9. Explain any three reason for the increase in deforestation under the colonial rule. 3

Or

What was the impact of colonial policies on the life of the pastoralists? Explain. 3

Or

How did the Enclouser Movement benefit Britain? Explain. 3

10. Explain the role of the adivasi and other peasant users in the decline of forest cover in the Indian sub-continent, between 1880 and 1920. 3

Or

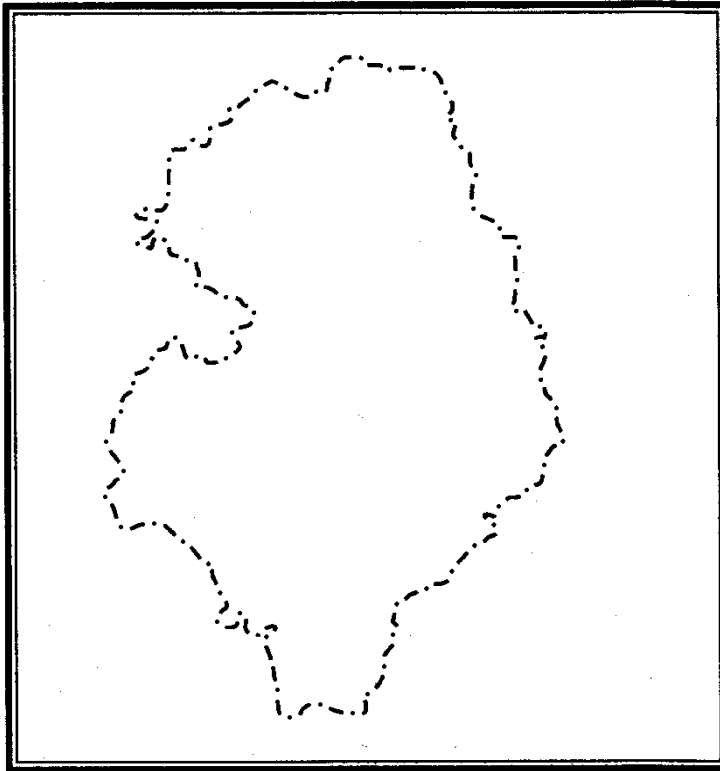
How do pastoralists adjust with the irregular climatic patterns? 3

Or

Give three reasons as to why Indian farmers were reluctant to grow opium?

11. Who is regarded as the greatest batsman in the history of cricket and why? 3
- Or**
- How did clothing originate? Discuss. 3
12. What are monsoons? State their characteristics. 1 + 2 = 3
13. Write a short note on the conservation of forest. 3
14. State three significant features of National Population Policy 2000. 3
15. Write down the three functions of election in a democratic state. 3 × 1 = 3
16. Describe how the members of the Lok Sabha are elected. 3
17. What are the features of the Indian Electoral System? 3
18. What does poverty means? Explain. 3
19. Explain any three features of the Public Distribution System. 3
20. Differentiate between the two dimensions of poverty. 3
21. Discuss the Saminist Movement in Indonesia. 5
- Or**
- Discuss various forms of Pastoralism. 5
- Or**
- Discuss the variety of seeds sown in USA. 5
22. Briefly explain why the name of the ICC was changed from the Imperial Cricket Conference to the International Cricket Conference. 5
- Or**
- Discuss the various stages of clothing. 5
23. Why is Kolkata wetter in July, while Shillong is wetter in June than in July? Give reasons. 5
24. You are living in a village though you have grown up in the urban area. After completing your education you have become a teacher in a private school in Delhi. Which factors will you consider before migrating to a village? Write any five factors. 5
25. Describe any five legislative powers of the President of India. 5
26. Enumerate economic rights often demanded by the people. 5
27. Why is food security essential? What will happen if there is no food security? 5
28. What will happen if there is food security? 5
29. On the given map of the Bastar, mark and locate the following : 3 × 1 = 3

- (ii) Narayanpur
- (iii) Bailadila Hills

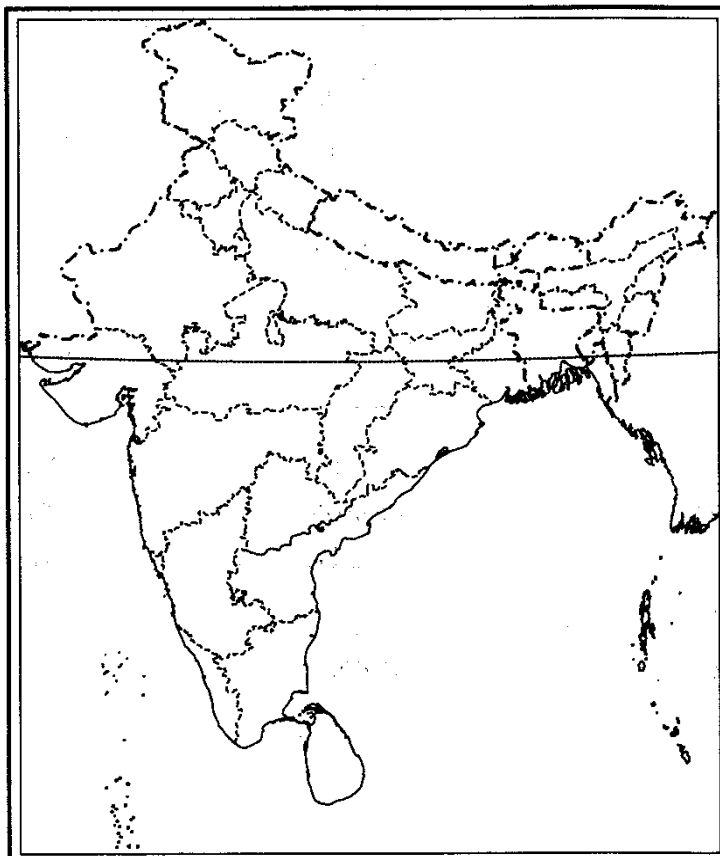


Or

On the given map of India, mark and locate the given below Pastoralist Communities of India.

3 × 1 = 3

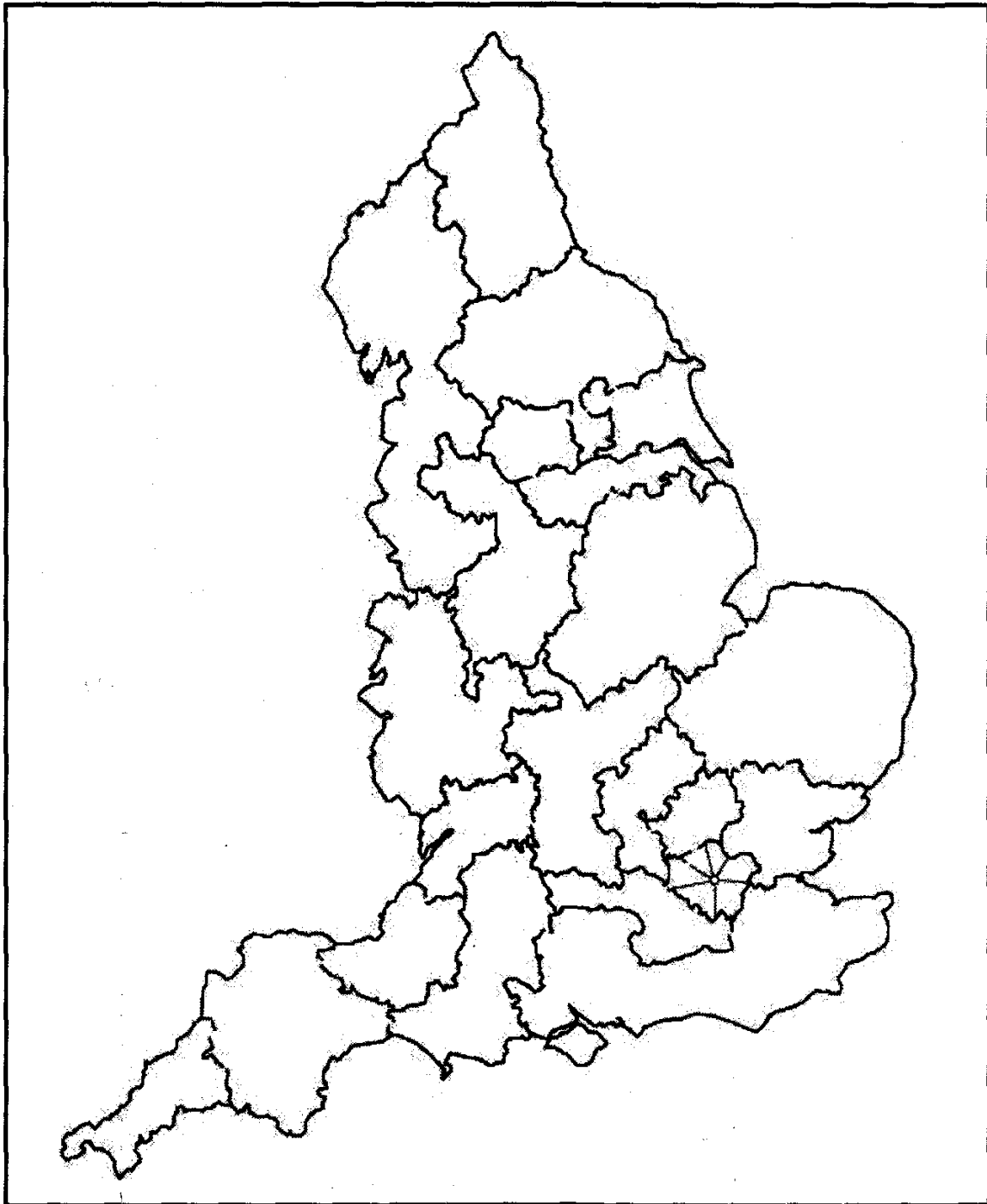
- (i) Raika
- (ii) Maldhari
- (iii) Kurba



Or

On the given map of England, mark and locate three region where threshing machines were broken or attached in different counties during Captain Swing Movement.

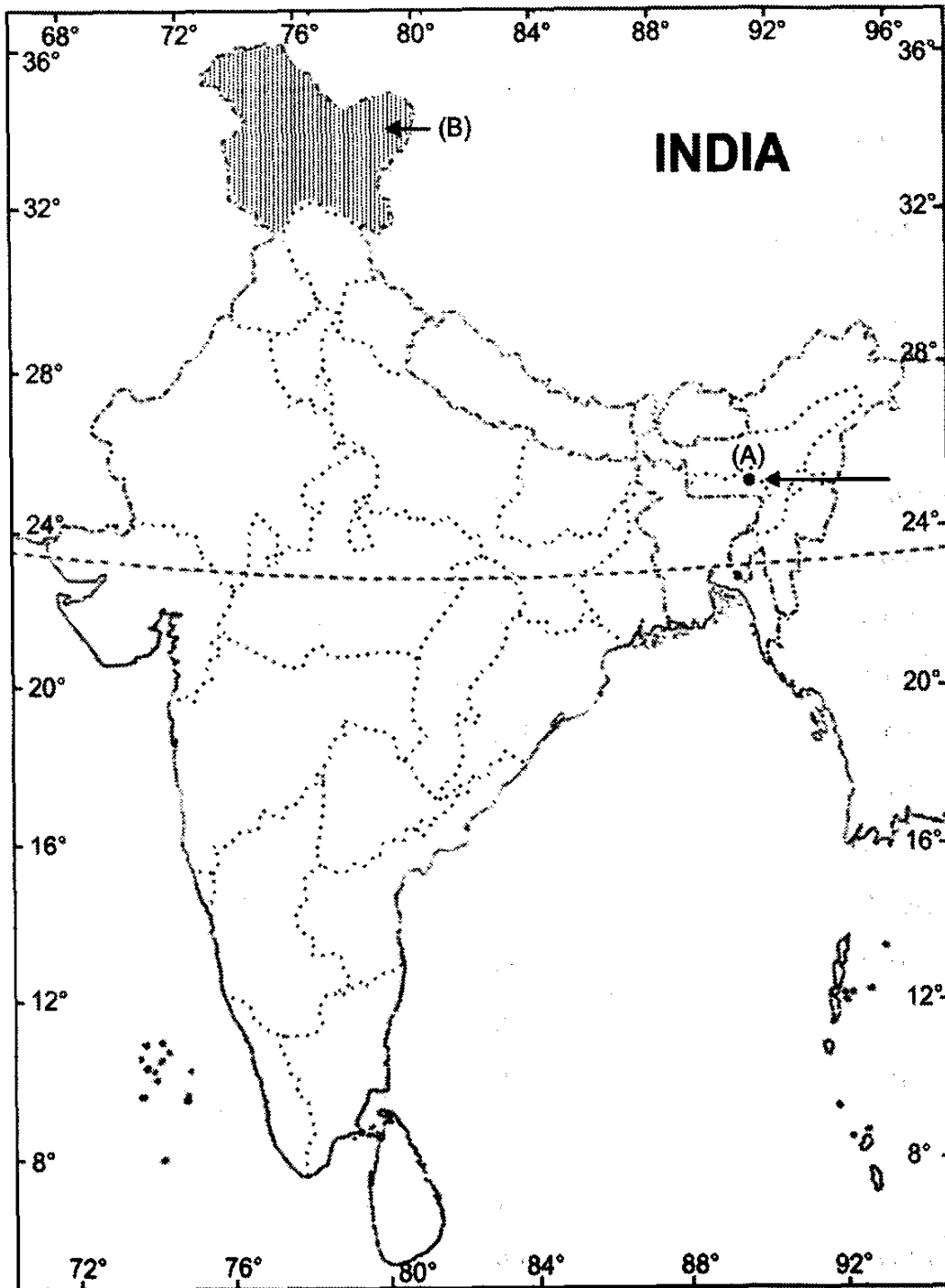
3



30. (i) Two features, A and B are marked on the given political outline map of India on the next page. Identify these features with the help of the following information and write their correct names on the lines marked in the map :

- (A) A wildlife sanctuary
- (B) An area of mountainous forest

- (ii) Locate and label the following on the same outline map of India : 2 + 1 = 3
 (C) Dachigam.



MODEL QUESTION PAPER—9**CLASS—IX (C.B.S.E.)****SOCIAL SCIENCE****TERM—II****Time Allowed: 3 Hours****Maximum Marks: 90****Instructions: Same as given in Model Question Paper—1.**

1. What is sport? 1

Or

Define Takli.

2. Which states experience Mango showers? 1
3. What is the meaning of Universal Adult Franchise? 1
4. Which house of the Parliament is directly elected? 1
5. What is the minimum age required to become the President of India? 1
6. Who estimates poverty line in India? 1
7. What is vulnerability? 1
8. What is the main function of the Food Cooperation of India? 1
9. State any three ways indicating that shifting cultivators were affected by changes in forest management in the colonial period. 3 × 1 = 3

Or

Why do the nomadic tribes need to move from one place to another? Explain.

3 × 1 = 3*Or*What did the Open Field System mean to a rich farmer in 18th century in England? Explain. 3 × 1 = 3

10. Explain why nomadic tribes need to move from one place to another. What are the environmental advantages of this continuous movement? 3

*Or*Explain any five ideas of Dietrich Brandis for the management of forests in India, during the British period. 3*Or*

Describe the effects of Agricultural Revolution in Britain.

16 3

11. Test cricket is a unique game in many ways. Discuss any three ways in which it is different from other team games. 3

Or

What were the Sumptuary Laws in France? Explain. 3

12. Define monsoon. What do you understand by break in monsoon? 1 + 2 = 3
13. What are bio-reserves? Give two examples. 1 + 2 = 3
14. What is sex ratio? Name two states having the highest and lowest sex ratio in India. 1 + 2 = 3
15. Write any three functions of the Presiding Officer. 3 × 1 = 3
16. Describe any three special powers of the Rajya Sabha. 3 × 1 = 3
17. 'Lok Sabha is more powerful than the Rajya Sabha.' How? 3 × 1 = 3
18. Why do different countries use different poverty line? 3
19. What do you know about rural employment generation programme? 3
20. Explain what is meant by vulnerability to poverty. 3
21. What are the similarities between the colonial management of the forest in Bastar and Java? 5

Or

Describe Transhumance Pastoralism in detail. 5

Or

Give an account of the Agricultural Revolution in Britain. 5

22. Explain why cricket became popular in India and West Indies. Can you give reasons why it did not become popular in countries like South America? 3 + 2 = 5

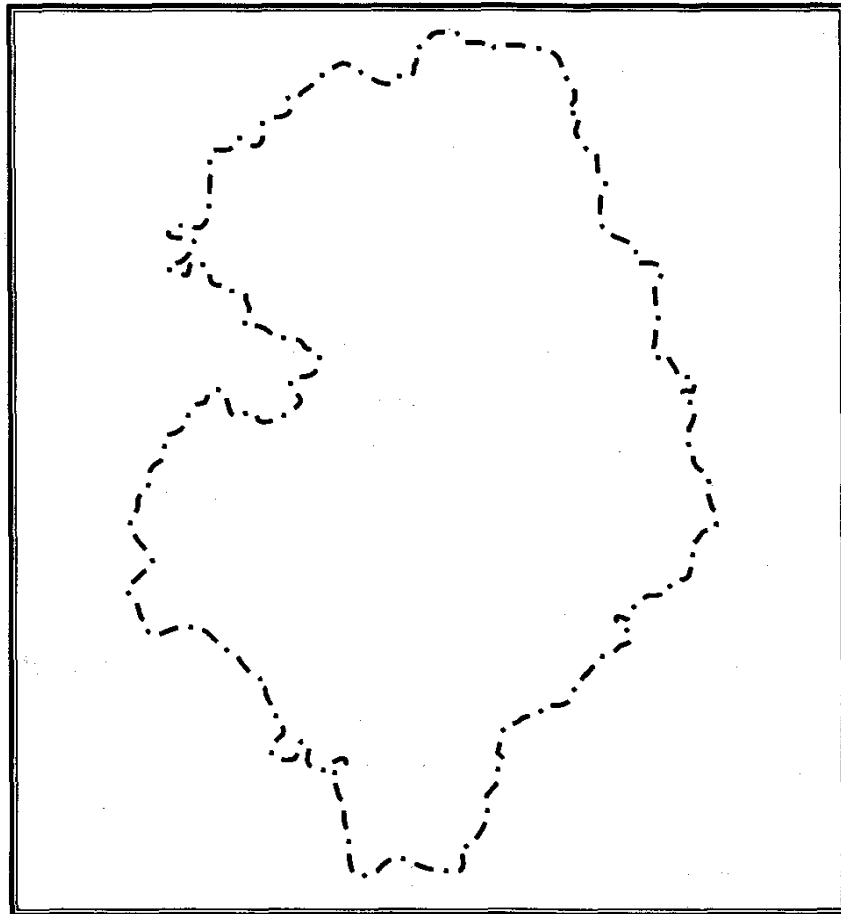
Or

Why did Mahatma Gandhi's dream of clothing the nation in Khadi appeal only to some sections of Indians? 5

23. 'Distribution of population is uneven in India.' Why? 5
24. 'What else does one expect from the mountains, if there is heavy tourist rush?' List the causes of recent destruction and loss of life due to heavy tourism. 5
24. Give an account of winter conditions and characteristics of the cold season. 5
25. Explain the legislative powers of the Indian President. 5
26. Give five features of fundamental rights, as given in the Indian Constitution. 5
27. State the role of cooperatives in food security programme. 5
28. In which way is the bufferstock used to ensure food security? 5
29. On the given map of Bastar, mark and locate the following: 1 + 1 + 1 = 3

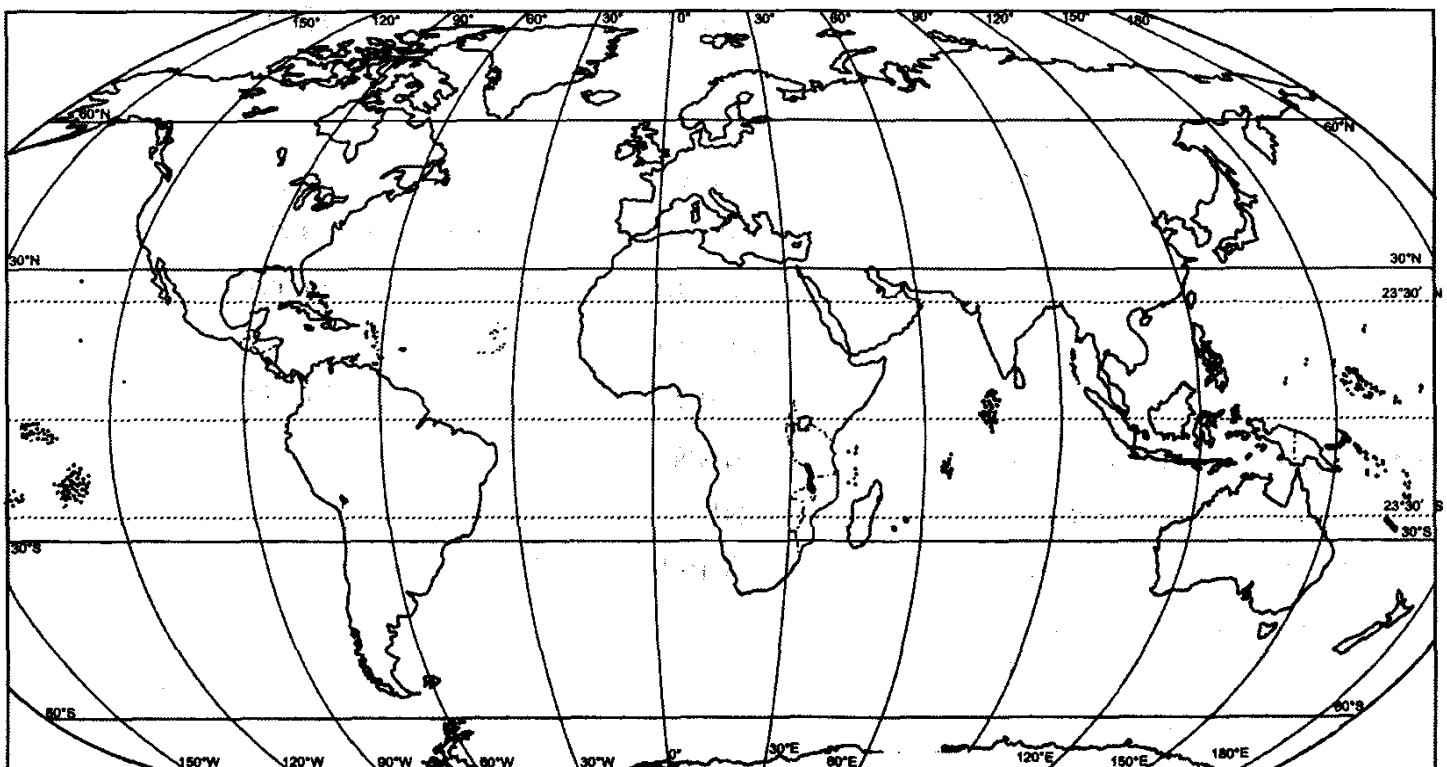
(ii) Bijapur

(iii) Kanker



Or

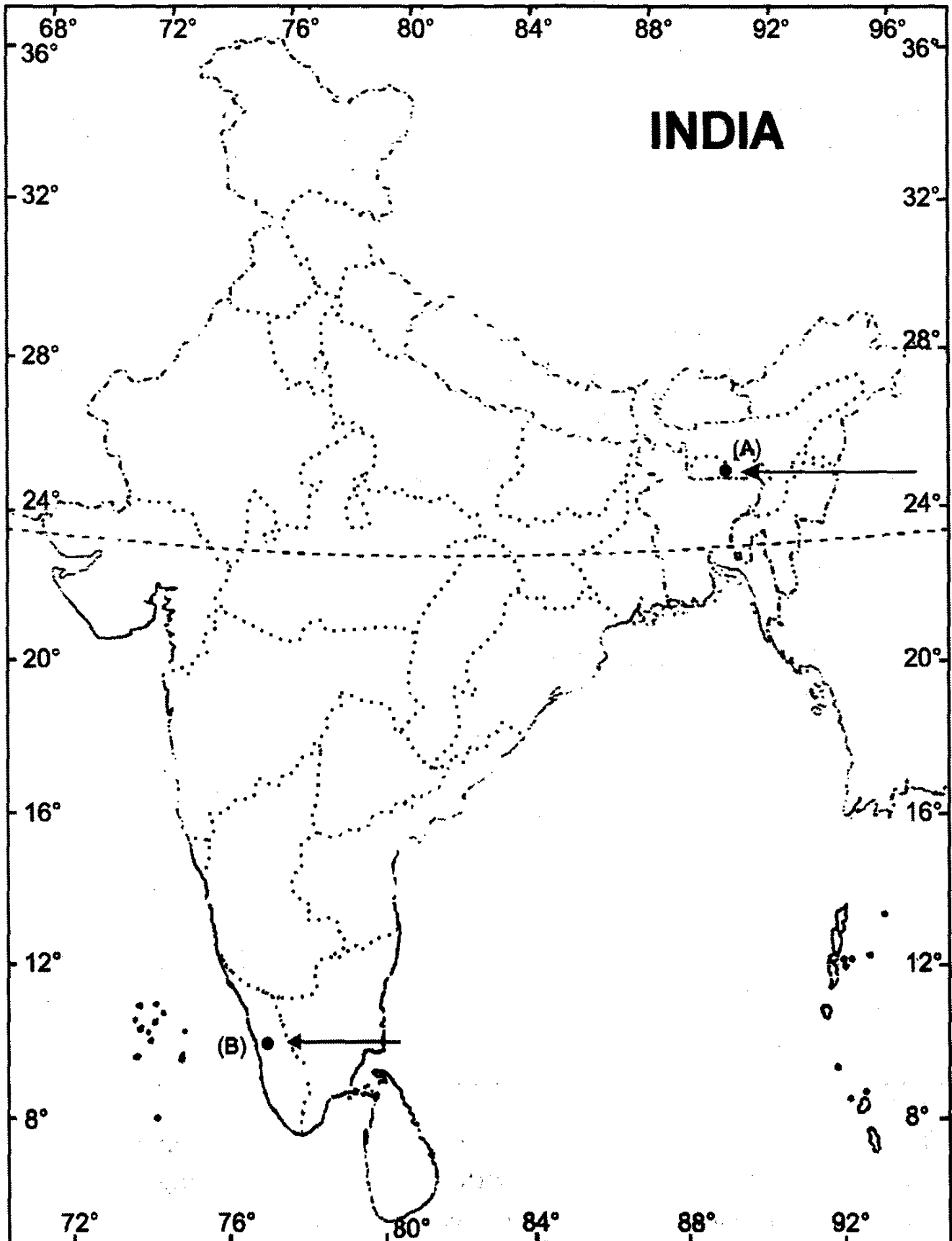
On the given map of the World, mark and locate the regions where shifting agriculture is known by the name of Milpa, Tavy and Chena.



(ii) Locate and label the following on the same outline map of India :

(C) South West Monsoons

2 + 1 = 3



MODEL QUESTION PAPER—10

CLASS—IX (C.B.S.E.)

SOCIAL SCIENCE

TERM—II

Time Allowed: 3 Hours

Maximum Marks : 90

Instructions: Same as Model Question Paper—1.

1. Why is a cricket match different from other sports? 1
- Or*
- What did the red cap introduced by the Jacobin Club symbolised? 1
2. Which state experiences Loo? 1
 3. How many Fundamental Rights are provided in the original Constitution? 1
 4. Whom does the Supreme Court advise? 1
 5. Who can be removed from his office by impeachment? 1
 6. What is poverty? 1
 7. Who estimates the poverty line in India? 1
 8. Define the concept of food security. 1
 9. Explain Dietrich Brandis, ideas for the management of forests in India during the British period. 3

Or

Describe various forms of Pastoralism. How do they adjust with the irregular climatic pattern? 3

Or

Describe the Agricultural Revolution in England. 3

10. Why was the practice of shifting cultivation banned by the European Colonialists? Explain briefly. 3

Or

Why did the cattle stock of the Maasai's decrease under the Colonial rule? Explain briefly. 3

Or

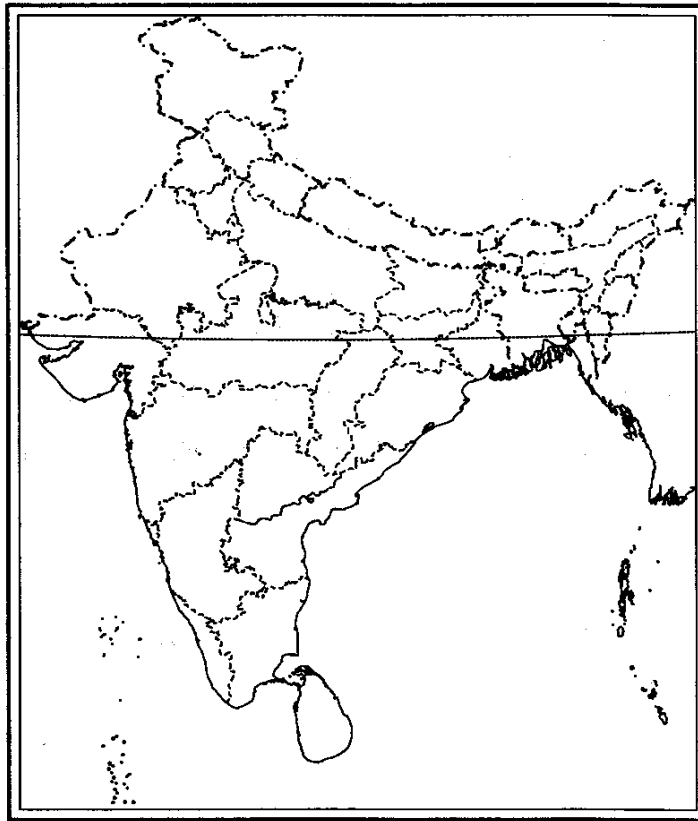
How did USA become the 'Bread Basket of the world'? 3

11. Give an account of the beginning of cricket in India. 3
- Or**
- Why did Mahatma Gandhi's dream of clothing the nation in Khadi appeal only to some sections of Indians? 3
12. 'Tamil Nadu is a coastal region and receives most of the rain in winter.' Why? 3
13. What is a biosphere reserve? Where and when was the first biosphere of India developed? 3
14. What is Census? After how many year does it take place? 3
15. "The Supreme Court is the guardian of the Constitution". Discuss. 3
16. Mention any two features of the Indian Civil Services. 3
17. How is Lok Sabha more powerful than the Rajya Sabha? 3
18. What is National Food for Work Programme? 3
19. Describe the global poverty trend. 3
20. What is minimum support price? What are the impact of procurement of food at enhanced minimum support price? 3
21. Why did people living in Bastar revolt against the British? 5
- Or**
- How do Pastoralists adjust with irregular climatic condition? 5
- Or**
- Describe the variety of seeds sown in USA. 5
22. How have advances in technology, especially television technology, affected the development of contemporary cricket? 5
- Or**
- Explain the reasons for change in the clothing patterns and material in the 18th century. 5
23. Why are the years 1921 and 1951 most significant in the history of population growth in India? 5
24. 'Irrational human actions and unscientific approach, in the name of so called development, resulted in the great tragedy of Uttarakhand'. List the basic natural causes and human actions which caused the devastation on a large-scale. 5
25. Which house of the Indian Parliament is more powerful and how? Explain. 5
26. Write any five functions of the returning officer. 5
27. Explain the dimension of food security. 5
28. What is buffer stock? Why is the buffer stock created by the government? 5

29 On the given map of India, mark and locate the following:

- (i) Bastar
- (ii) Dehradun
- (iii) A place which belonged to Birsa Munda

3 × 1 = 3

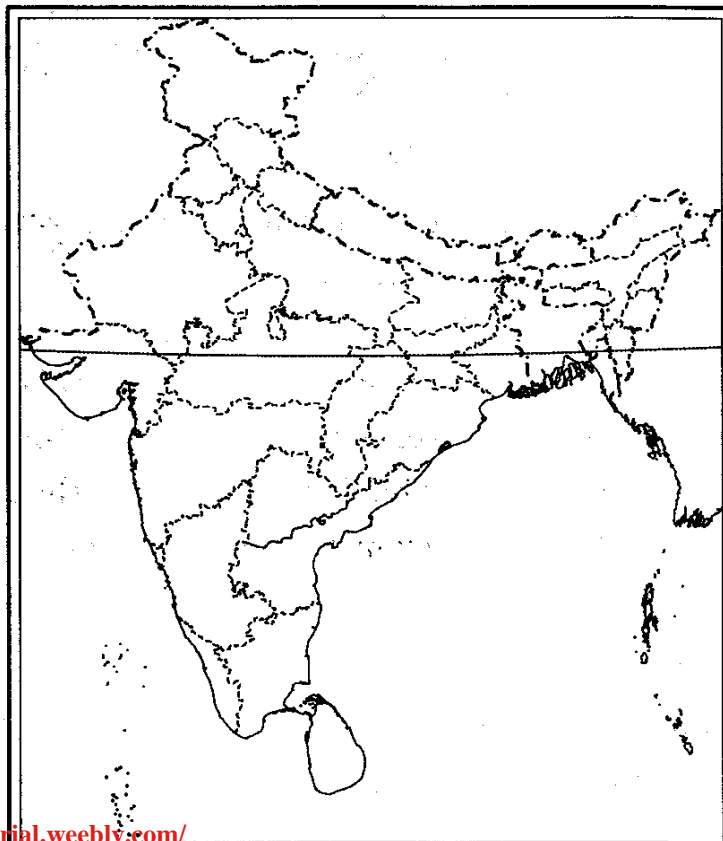


Or

On the given map of India, mark and locate the following Pastoralist Communities.

- (i) Banjaras
- (ii) Raikas
- (iii) Kurumas

1 + 1 + 1 = 3



Or

On the given map of USA, mark and locate the west-ward expansion of white settlement between 1830 to 1920.

3



30. (i) Two features, A and B, are marked on the given political outline map of India on the next page. Identify these features with the help of the following information and write their correct names on the lines marked on the map :

(A) A state receiving rainfall from Mango showers.

(B) A wildlife sanctuary.

(ii) Locate and label the following on the outline map of India :

2 + 1 = 3

(C) Simlipal National Park

