

JSUNIL TUTORIAL

(a) $65^\circ, 35^\circ$

(b) $65^\circ, 25^\circ$

(c) $13x^\circ, 5x^\circ$

(d) $25^\circ, 65^\circ$

7. The square root which number is rational:

(a) 7

(b) 1.96

(c) 0.04

(d) 13

8. If polynomial $p(x) = 3x^4 - 4x^3 - 3x - 1$ is divided by $(x - 1)$, then remainder is:

(a) 3

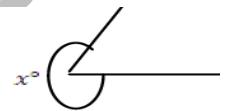
(b) -4

(c) -1

(d) None of these

9. In the figure $\angle x$ is

- a) Reflexive angle b) Acute angles c) Obtuse angle d) Exterior angle



10. What is the common between the three angles of a triangle & a linear pair:

(a) angles are equal

(b) in both cases sum of angles is 180°

(c) in triangle there are three angles & in linear pair there are two angles. (d) All of these

Section - 'B' (carry two marks each)

11. Express $23.\overline{43}$ in form p/q where $q \neq 0$

12. Find the value of x , if $AB \parallel CD$


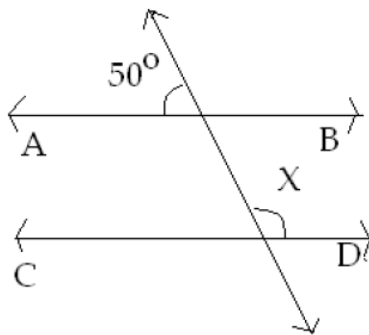


Fig. 13.1

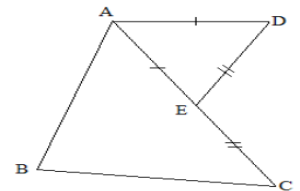


fig.16.1

13. In fig 13.1 if $AC=BD$, then prove that $AB=CD$.

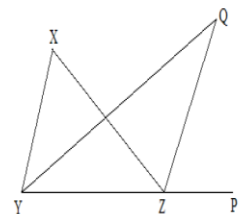
14 The sides of a triangular plot are in the ratio of 3:5:7 and its perimeter is 300m. Find its area.

15. Evaluate $(-1/27)^{-2/3}$

16. In the given fig.16.1 $DE = EC$. Show that $AB + BC > AD$

17. In fig. the side YZ of $\triangle XYZ$ is produced to a point P .

if the bisectors of $\angle XYZ$ and $\angle XZP$ meet at point Q . then prove that $\angle YQZ = \frac{1}{2} \angle YXZ$.



18. If a transversal intersects two lines such that the bisectors PQ and RS of a pair of corresponding angles are parallel, and then prove that two lines PQ and RS are parallel.

SECTION C

Question numbers 19 to 28 carry 3 marks each.

19. Simplify the following by rationalising the denominators

$$\frac{2\sqrt{6}}{\sqrt{2} + \sqrt{3}} + \frac{6\sqrt{2}}{\sqrt{6} + \sqrt{3}}$$

OR

If $\frac{\sqrt{5} + \sqrt{3}}{\sqrt{5} - \sqrt{3}} = a - \sqrt{15}b$, find the values of a and b.

20. If $a = 9 - 4\sqrt{5}$, find the value of $a - \frac{1}{a}$.

OR

If $x = 3 + 2\sqrt{2}$, find the value of $x^2 + \frac{1}{x^2}$

21. Represent $\sqrt{3.5}$ on the number line.

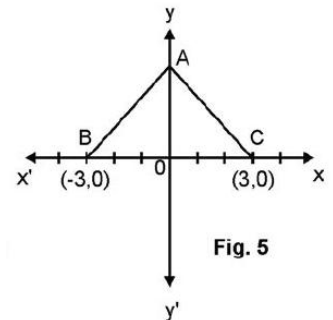
22. If $(x-3)$ and $x - \frac{1}{3}$ are both factors of $ax^2 + 5x + b$, show that $a=b$.

23. Find the value of $x^3 + y^3 + 15xy - 125$ when $x+y=5$.

OR

If $a+b+c=6$, find the value of $(2-a)^3 + (2-b)^3 + (2-c)^3 - 3(2-a)(2-b)(2-c)$

24. In Fig. 5. ABC is an equilateral triangle with coordinates of B and C as B(-3, 0) and C (3, 0). Find the coordinates of the vertex A.



25. Factorize: $x^{12} - y^{12}$

26. Prove: $a^3 + b^3 + c^3 - 3abc = \frac{1}{2} (a + b + c)[(a - b)^2 + (b - c)^2 + (c - a)^2]$

27. Locate the points (5,8), (0,5), (2,5), (5,2), (-3,0), (8,0) in the Cartesian plane

28. Find the area of a triangle, two sides of which are 18 cm and 10 cm and the perimeter is 42 cm.

Section – 'D' (carry four marks each)

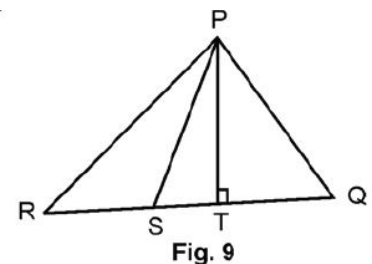
29. In a quad. ABCD, BO and CO are bisectors of interior angles B and C intersecting at O. Show that $\angle BOC = 90^\circ + \frac{1}{2} \angle BAC$

30. Factorize: $x^3 - 23x^2 + 142x + 120$

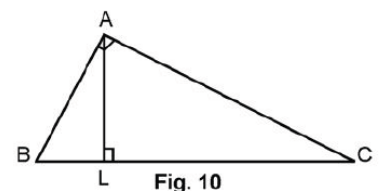
31. Factorize: $4x^2 + 9y^2 + 16z^2 + 12xy - 24yz - 16xz$

32. In Fig. 9, PS is bisector of $\angle QPR$; $PT \perp RQ$ and $\angle Q > \angle R$. Show that

$$\angle TPS = \frac{1}{2} (\angle Q - \angle R).$$



33. In $\triangle ABC$, right angled at A, (Fig. 10), AL is drawn perpendicular to BC. Prove that $\angle BAL = \angle ACB$.



34. In Fig. 11, $AB = AD$, $AC = AE$ and $\angle BAD = \angle CAE$. Prove that $BC = DE$.

